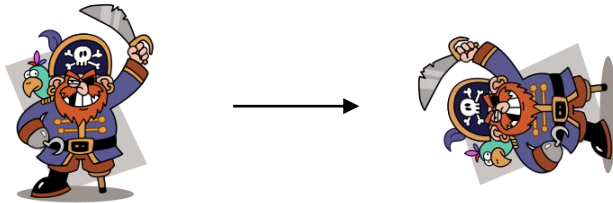
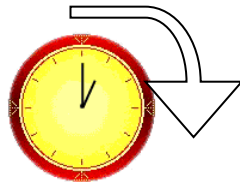




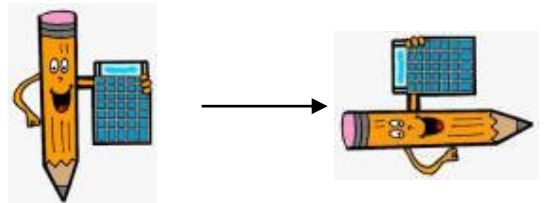
Name: _____

Can I recognise a clockwise or anticlockwise turn?

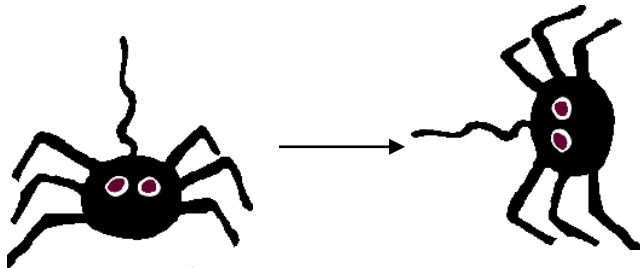
How have these objects turned? Clockwise or anti-clockwise?
Circle the right answer.



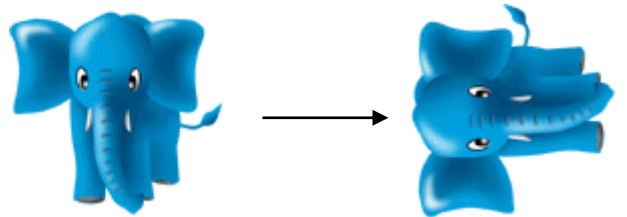
clockwise ↻ or anti-clockwise ↺?




clockwise ↻ or anti-clockwise ↺?



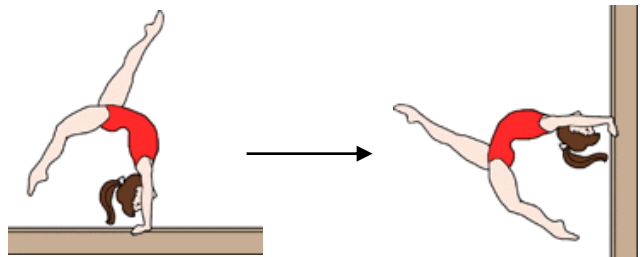
clockwise ↻ or anti-clockwise ↺?



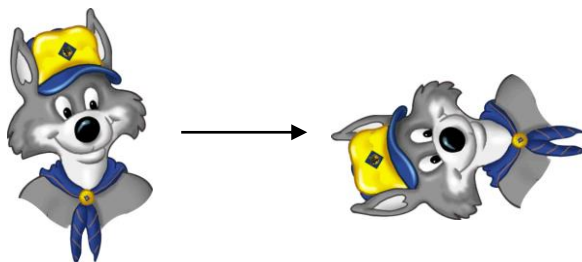
clockwise ↻ or anti-clockwise ↺?



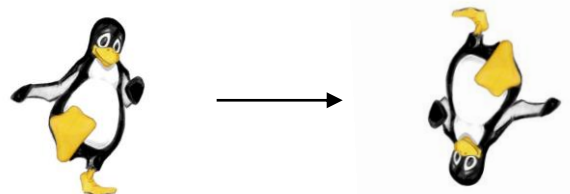
clockwise ↻ or anti-clockwise ↺?



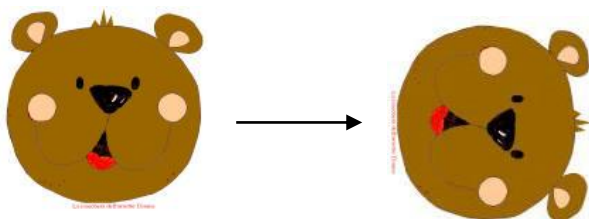
clockwise ↻ or anti-clockwise ↺?



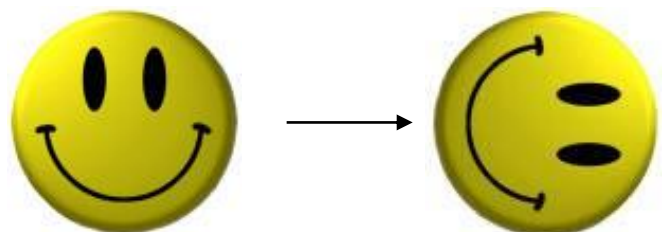
clockwise ↻ or anti-clockwise ↺?



clockwise ↻ or anti-clockwise ↺?



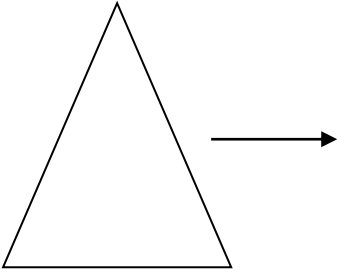
clockwise ↻ or anti-clockwise ↺?



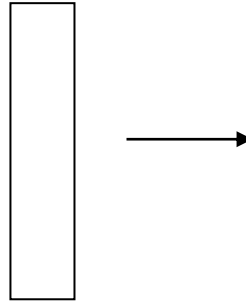
clockwise ↻ or anti-clockwise ↺?

Extension - Which way will these shapes face after they have turned.....

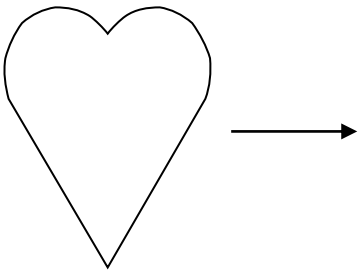
.....quarter turn / 90° clockwise?



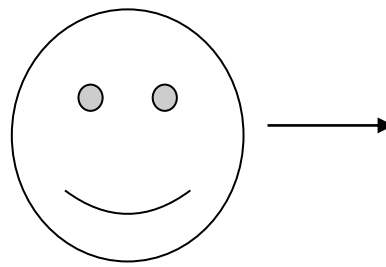
.....three quarter turn / 270° clockwise?



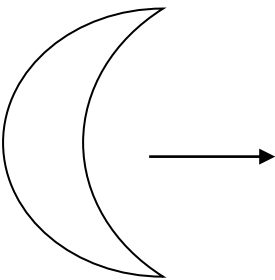
.....quarter turn / 90° anti-clockwise?



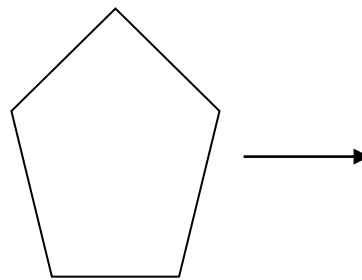
.....three quarter turn / 270° anti-clockwise?



.....half turn / 180° clockwise?



.....half turn / 180° anti-clockwise?



Make a similar question for someone else to solve!

